

**OXFORD CAMBRIDGE AND RSA EXAMINATIONS**  
**GCSE (9–1)**  
**J560/05**

**MATHEMATICS**  
**Paper 5 (Higher Tier)**

**THURSDAY 7 JUNE 2018: Morning**  
**TIME ALLOWED: 1 hour 30 minutes**  
**plus your additional time allowance**

**MODIFIED ENLARGED**

<b>First name</b>		<b>Last name</b>	
-------------------	--	------------------	--

<b>Centre number</b>						<b>Candidate number</b>				
----------------------	--	--	--	--	--	-------------------------	--	--	--	--

**YOU MAY USE:**  
geometrical instruments  
tracing paper  
Models for Question 14

**DO NOT USE:**  
a calculator

**NO CALCULATOR CAN BE USED FOR THIS PAPER**

**READ INSTRUCTIONS OVERLEAF**



## **INSTRUCTIONS**

**Use black ink. You may use an HB pencil for graphs and diagrams.**

**Complete the boxes on the front page with your name, centre number and candidate number.**

**Answer ALL the questions.**

**Read each question carefully before you start to write your answer.**

**Where appropriate, your answers should be supported with working. Marks may be given for a correct method even if the answer is incorrect.**

**Write your answer to each question in the space provided. If additional space is required, use the lined page(s) at the end of this booklet. The question number(s) must be clearly shown.**

## **INFORMATION**

**The total mark for this paper is 100.**

**The marks for each question are shown in brackets [ ].**

**Answer ALL the questions.**

**1 (a) Calculate.**

$$\frac{3}{5} + \frac{5}{8}$$

**Give your answer as a mixed number in its simplest form.**

**(a) \_\_\_\_\_ [3]**

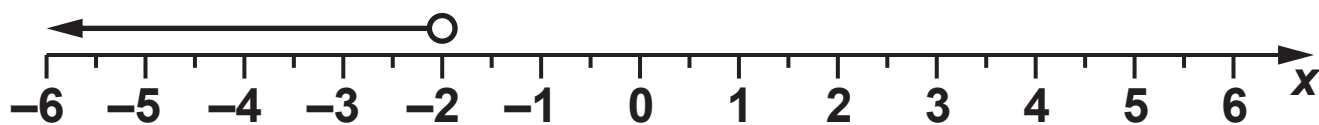
**(b) Work out.**

$$5 \times 10^4 - 1.6 \times 10^3$$

**Give your answer in standard form.**

**(b) \_\_\_\_\_ [3]**

2 Gemma's solution to the inequality  $3x + 1 > -5$  is shown on the number line.



Is Gemma's solution correct?  
Explain your reasoning.

---

[3]

**3 Work out.**

(a)  $\begin{pmatrix} -3 \\ 2 \end{pmatrix} + \begin{pmatrix} 5 \\ 7 \end{pmatrix}$  [1]

(a)  $\begin{pmatrix} \phantom{0} \\ \phantom{0} \end{pmatrix}$

(b)  $\begin{pmatrix} 3 \\ 4 \end{pmatrix} - 2 \begin{pmatrix} 1 \\ -3 \end{pmatrix}$  [2]

(b)  $\begin{pmatrix} \phantom{0} \\ \phantom{0} \end{pmatrix}$

**4 Here is the nutritional information for a 110 g serving of cereal.**

<b>Carbohydrates</b>	<b>99.4 g</b>
<b>Proteins</b>	<b>9.5 g</b>
<b>Fats</b>	<b>1.1 g</b>

**Emily says that more than 90% of this serving is carbohydrates.**

**Is she correct?  
Explain your reasoning.**

---

---

[3]

- 5 The table shows the relative frequencies of the results for a football team after a number of games. [2]

<b>Result of game</b>	<b>won</b>	<b>lost</b>	<b>drew</b>
<b>Relative frequency</b>	<b>0.2</b>	<b>0.45</b>	

(a) Complete the table.

(b) The team lost 10 more games than they won.

How many games did the team play altogether?

(b) \_\_\_\_\_ [3]

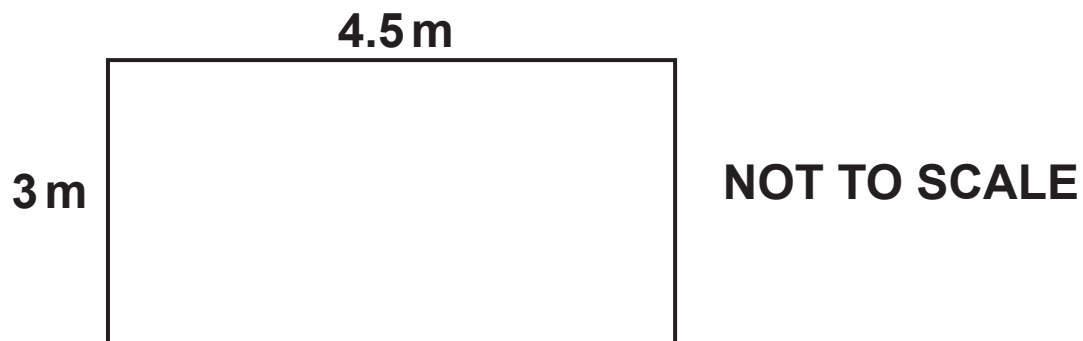
- 6 Jack sent 15% more text messages in March than in February.  
Jack sent 460 text messages in March.**

**How many more texts did Jack send in March than in February?**

\_\_\_\_\_ **[4]**



7 Here is the floor plan of a rectangular room.



Tim buys carpet tiles for this room.

Each tile is a square measuring 50 cm by 50 cm.

The tiles are only sold in packs of ten.

Each pack costs £20.

Tim pays for fitting at a rate of £7.50 per square metre, with any fraction of a square metre rounded up.

Work out the **TOTAL** cost of the tiles and fitting.

£ \_\_\_\_\_ [6]

**8 Hannah wants to display all the possible outcomes when rolling two fair 6-sided dice.**

**(a) Give a reason why a tree diagram is not the best method to use.**

\_\_\_\_\_ [1]

**(b) (i) Draw a sample space to display all the possible outcomes. [2]**

(ii) Show that the probability of the scores on the two dice adding to 11 is  $\frac{1}{18}$ .

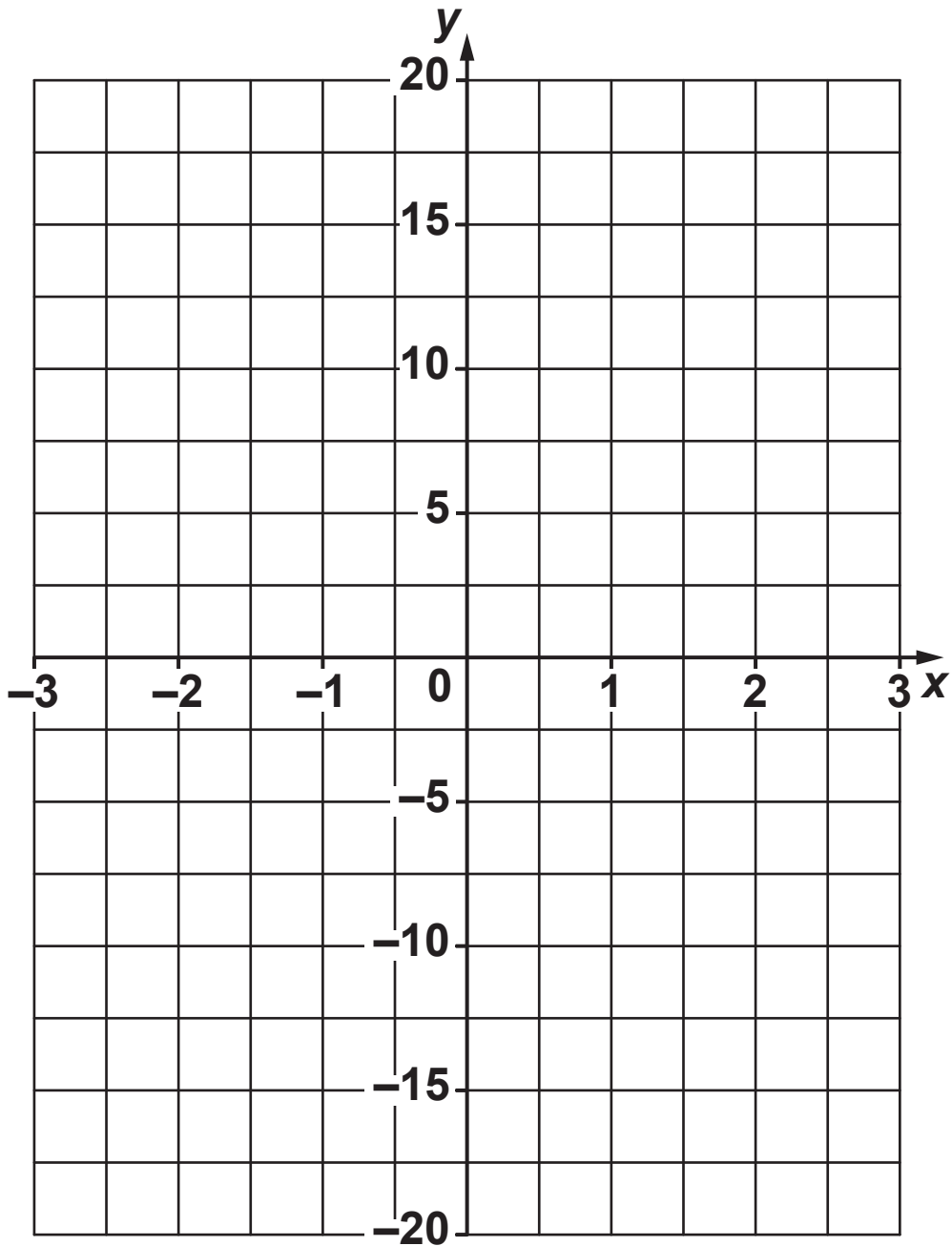
---

[2]

9 (a) Complete the table for  $y = x^3 - 3x$ . [1]

$x$	-3	-2	-1	0	1	2	3
$y$	-18	-2		0	-2	2	18

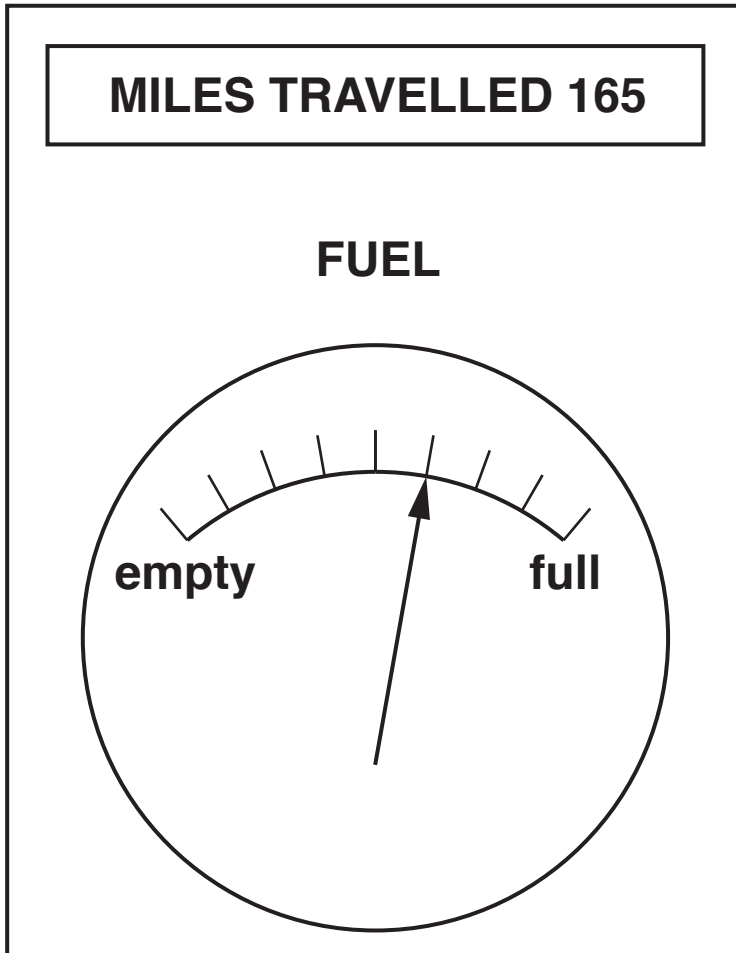
(b) Draw the graph of  $y = x^3 - 3x$  for  $-3 \leq x \leq 3$ . [3]



**(c) Use your graph to solve  $x^3 - 3x = 10$ .**

**(c)  $x =$  \_\_\_\_\_ **[1]****

- 10 Ifsaw noticed this information on her car's dashboard at the end of her journey.  
She started her journey with a full tank of fuel and her miles travelled set to zero.



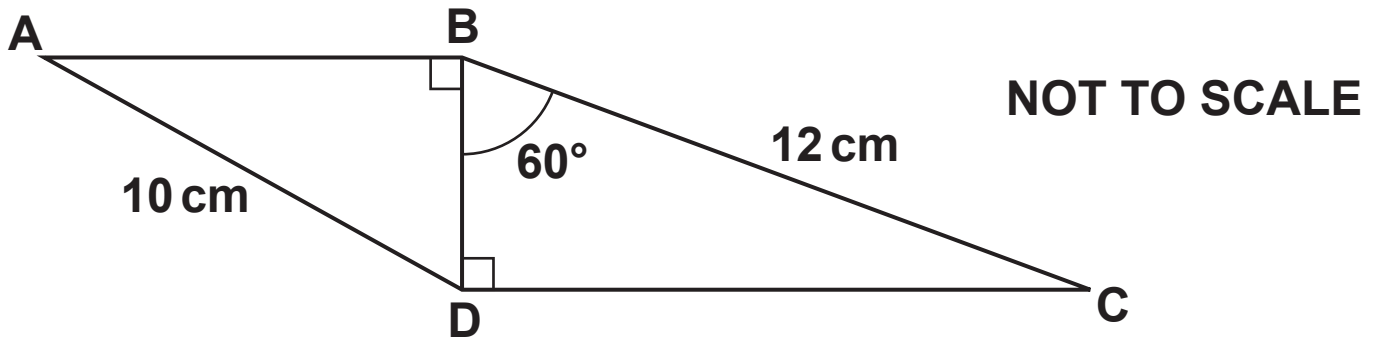
**(a) Work out how far Ifsaw's car can travel on a full tank of fuel.**

**(a) \_\_\_\_\_ miles [3]**

**(b) What assumption have you made when answering part (a)?**

\_\_\_\_\_  
\_\_\_\_\_ [1]

- 11 The diagram shows two right-angled triangles ABD and BCD, sharing a common side BD. AD = 10 cm, BC = 12 cm and angle DBC = 60°.



Work out the length of AB.



12 Carol says that  $64^{-\frac{1}{2}} = \frac{1}{32}$ .

Explain her error and give the correct value of  $64^{-\frac{1}{2}}$  in the form  $\frac{p}{q}$ .

---

---

---

---

[3]

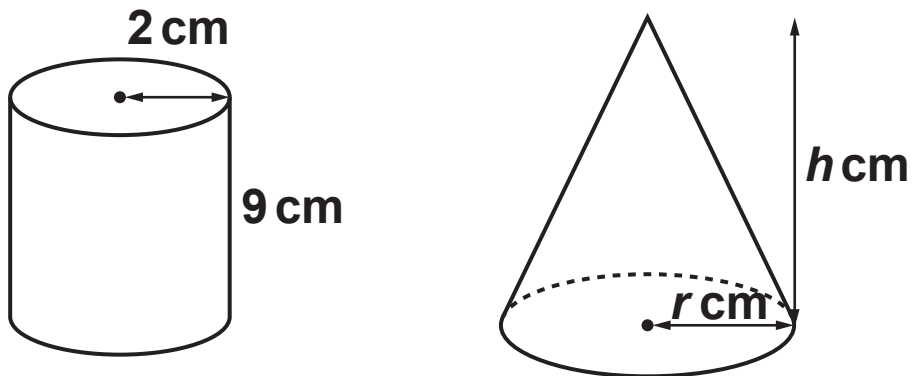
13 (a) Write  $\frac{5}{12}$  as a recurring decimal.

(a) \_\_\_\_\_ [2]

**(b) Convert  $0.\dot{7}\dot{6}$  to a fraction.**

**(b) \_\_\_\_\_ [2]**

- 14 The diagram shows a cylinder and a cone. You may use models provided to help you.



The cylinder has radius 2 cm and height 9 cm.  
The cone has radius  $r$  cm and height  $h$  cm.

The ratio  $r : h$  is 1 : 4.

The volume of the cone is EQUAL TO the volume of the cylinder.

Work out the value of  $r$ .

[The volume  $V$  of a cone with radius  $r$  and height  $h$  is

$$V = \frac{1}{3}\pi r^2 h.]$$

---

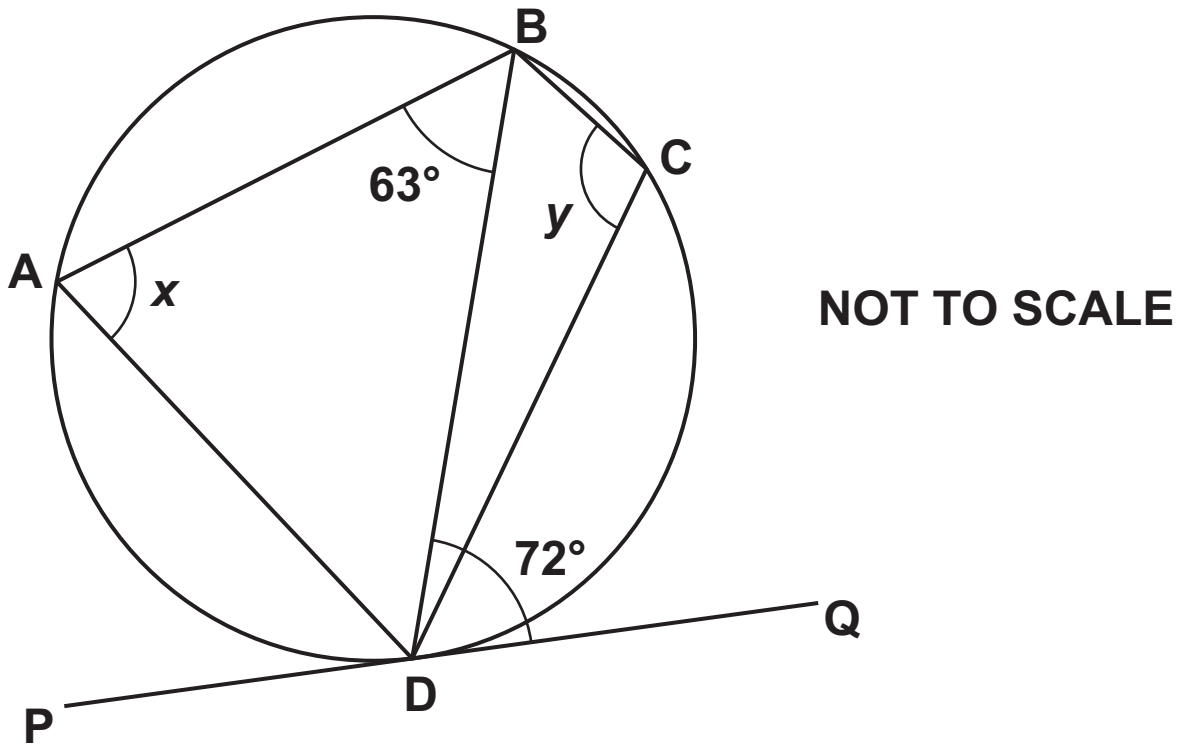
[5]

**15**  $n$  is a positive integer.

**Prove that  $13n + 3 + (3n - 5)(2n + 3)$  is a multiple of 6. [4]**

**BLANK PAGE**

- 16 A, B, C and D are points on the circumference of a circle.



PQ is a tangent to the circle at D.  
 Angle  $BDQ = 72^\circ$  and angle  $ABD = 63^\circ$ .

- (a) Work out angle  $x$ .  
 Give a reason for your answer.

Angle  $x =$  \_\_\_\_\_  $^\circ$  because \_\_\_\_\_

\_\_\_\_\_ [2]



- (b) Work out angle  $y$ .  
Give a reason for your answer.

Angle  $y =$  \_\_\_\_\_ $^{\circ}$  because \_\_\_\_\_  
\_\_\_\_\_ [2]

17  $(x + a)(x + 3)(2x + 1) = bx^3 + cx^2 + dx - 12$

Find the value of  $a$ ,  $b$ ,  $c$  and  $d$ .

$a =$  \_\_\_\_\_

$b =$  \_\_\_\_\_

$c =$  \_\_\_\_\_

$d =$  \_\_\_\_\_ [4]

**BLANK PAGE**

- 18 (a) A straight line passes through the point (0, 6) and is perpendicular to  $y = 4x - 5$ .

Find the equation of this line, giving your answer in the form  $y = mx + c$ .

(a) \_\_\_\_\_ [3]

**(b) Work out the coordinates of the intersection of the graphs of  $y = 4x - 5$  and  $y = x^2 - 17$ .**

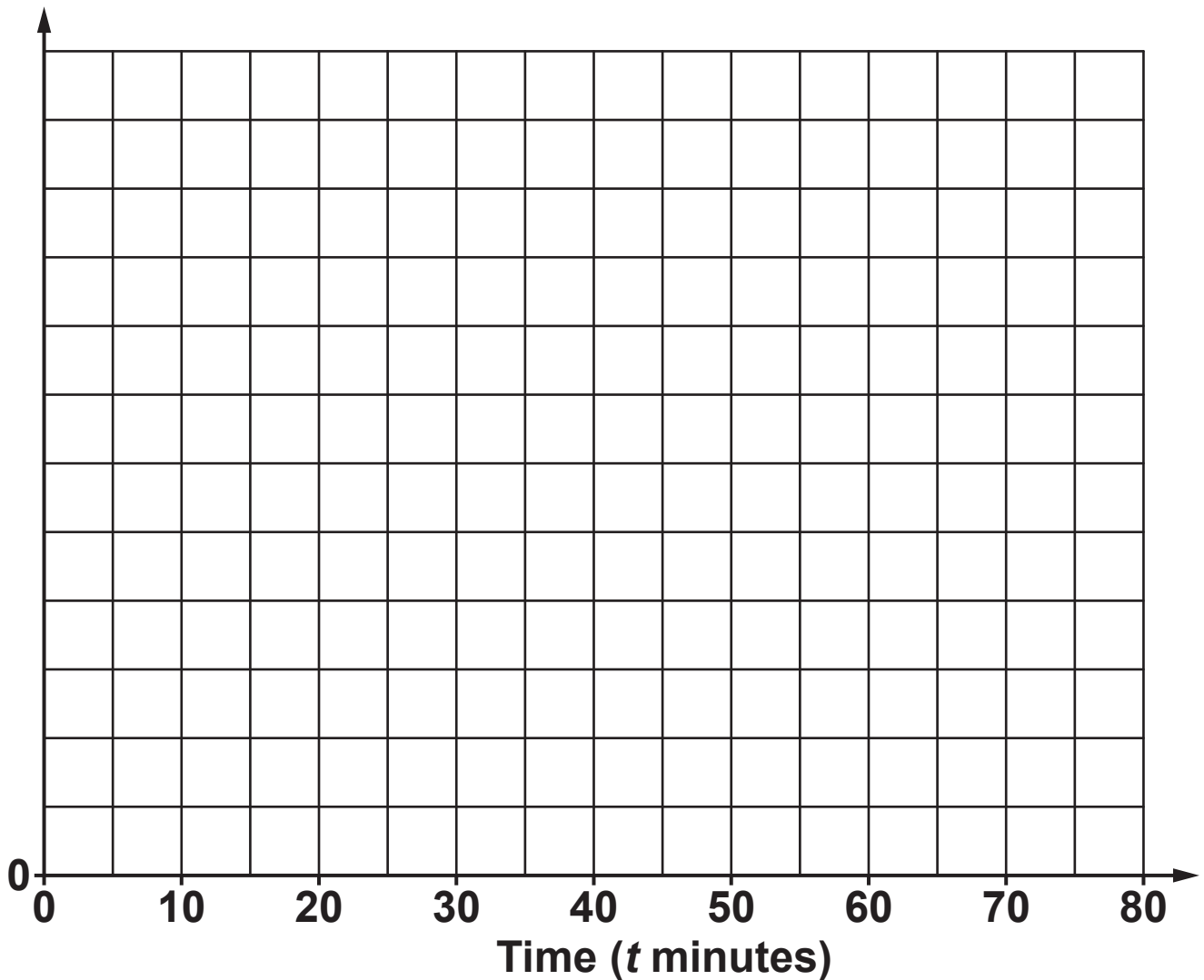
**(b) ( \_\_\_\_\_ , \_\_\_\_\_ )**

**( \_\_\_\_\_ , \_\_\_\_\_ ) [6]**

- 19 Ceri records the time taken,  $t$  minutes, to travel to school for a sample of 168 students at her Academy.

Time taken ( $t$ minutes)	Frequency
$0 < t \leq 10$	54
$10 < t \leq 20$	50
$20 < t \leq 40$	44
$40 < t \leq 80$	20

- (a) Draw a histogram to represent this information. [4]



**(b) Ceri says**

**The longest time that any of these students took to travel to school was 80 minutes.**

**Is she correct?**

**Give a reason for your answer.**

---

---

[1]

**(c) Ceri also claims that 25% of all of the students at this Academy took more than 30 minutes to travel to school.**

**(i) Show how Ceri might have worked out her claim. Use the space below.**

[2]

**(ii) State one assumption that Ceri has made in making her claim.**

---

---

**[1]**



**20** In the following equation,  $n$  is an integer greater than 1.

$$(\sqrt{2})^n = k\sqrt{2}$$

**(a) (i)** Find  $k$  when  $n = 7$ .

**(a)(i)**  $k =$  \_\_\_\_\_ **[2]**

**(ii)** Find  $n$  when  $k = 64$ .

**(ii)**  $n =$  \_\_\_\_\_ **[2]**

(b) Show that  $\frac{14}{3 - \sqrt{2}}$  can be written in the form  $a + b\sqrt{2}$ . Use the space below. [5]

**END OF QUESTION PAPER**






### Copyright Information

**OCR is committed to seeking permission to reproduce all third-party content that it uses in its assessment materials. OCR has attempted to identify and contact all copyright holders whose work is used in this paper. To avoid the issue of disclosure of answer-related information to candidates, all copyright acknowledgements are reproduced in the OCR Copyright Acknowledgements Booklet. This is produced for each series of examinations and is freely available to download from our public website ([www.ocr.org.uk](http://www.ocr.org.uk)) after the live examination series.**

**If OCR has unwittingly failed to correctly acknowledge or clear any third-party content in this assessment material, OCR will be happy to correct its mistake at the earliest possible opportunity.**

**For queries or further information please contact the Copyright Team, First Floor, 9 Hills Road, Cambridge CB2 1GE.**

**OCR is part of the Cambridge Assessment Group; Cambridge Assessment is the brand name of University of Cambridge Local Examinations Syndicate (UCLES), which is itself a department of the University of Cambridge.**