



M8

GENERAL CERTIFICATE OF SECONDARY EDUCATION
MATHEMATICS C (GRADUATED ASSESSMENT)
 MODULE M8 – SECTION B

B278B



Candidates answer on the question paper.

OCR supplied materials:
None

Other materials required:

- Geometrical instruments
- Tracing paper (optional)
- Scientific or graphical calculator

Thursday 20 January 2011
Morning

Duration: 30 minutes



Candidate forename		Candidate surname	
-----------------------	--	----------------------	--

Centre number						Candidate number			
---------------	--	--	--	--	--	------------------	--	--	--

INSTRUCTIONS TO CANDIDATES

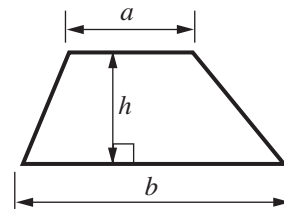
- Write your name, centre number and candidate number in the boxes above. Please write clearly and in capital letters.
- Use black ink. Pencil may be used for graphs and diagrams only.
- Read each question carefully. Make sure you know what you have to do before starting your answer.
- Show your working. Marks may be given for a correct method even if the answer is incorrect.
- Write your answer to each question in the space provided. Additional paper may be used if necessary but you must clearly show your candidate number, centre number and question number(s).
- Answer **all** the questions.
- Do **not** write in the bar codes.

INFORMATION FOR CANDIDATES

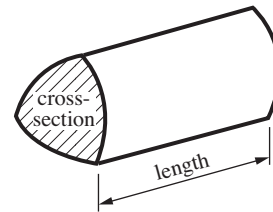
- The number of marks is given in brackets [] at the end of each question or part question.
- Section B starts with question 8.
- You are expected to use a calculator in Section B of this paper.
- Use the π button on your calculator or take π to be 3.142 unless the question says otherwise.
- The total number of marks for this Section is **25**.
- This document consists of **8** pages. Any blank pages are indicated.

Formulae Sheet

Area of trapezium = $\frac{1}{2}(a + b)h$



Volume of prism = (area of cross-section) \times length

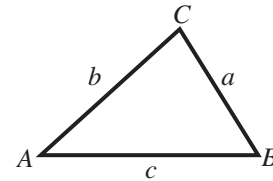


In any triangle ABC

Sine rule $\frac{a}{\sin A} = \frac{b}{\sin B} = \frac{c}{\sin C}$

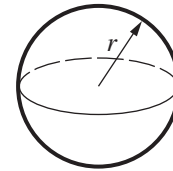
Cosine rule $a^2 = b^2 + c^2 - 2bc \cos A$

Area of triangle = $\frac{1}{2}ab \sin C$



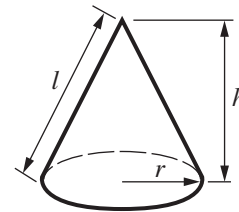
Volume of sphere = $\frac{4}{3}\pi r^3$

Surface area of sphere = $4\pi r^2$



Volume of cone = $\frac{1}{3}\pi r^2 h$

Curved surface area of cone = $\pi r l$



The Quadratic Equation

The solutions of $ax^2 + bx + c = 0$, where $a \neq 0$, are given by

$$x = \frac{-b \pm \sqrt{(b^2 - 4ac)}}{2a}$$

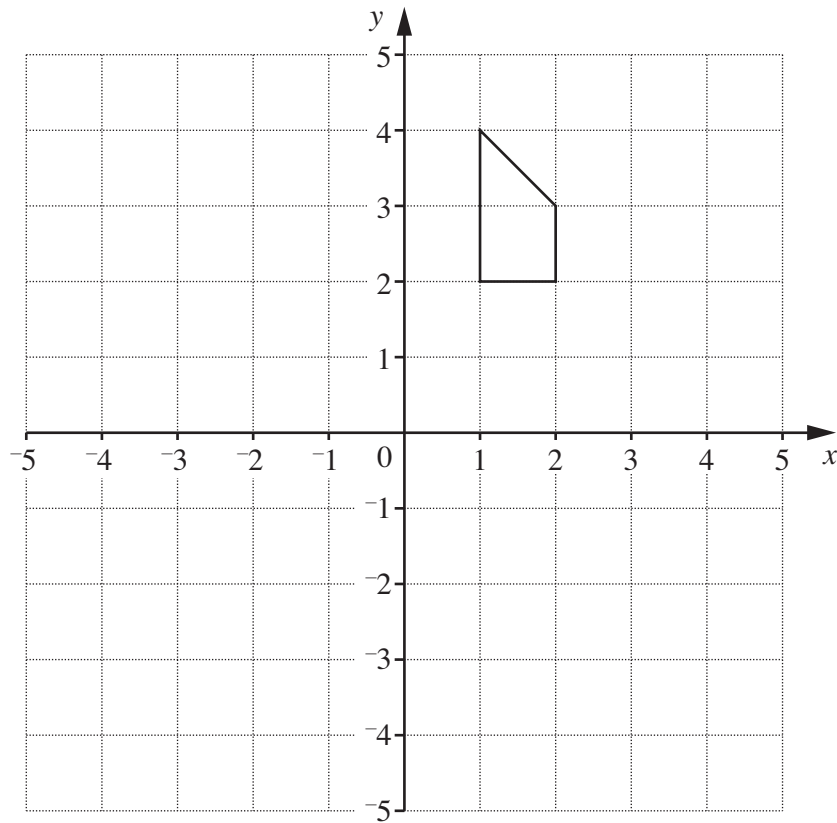
PLEASE DO NOT WRITE ON THIS PAGE

8 Anna writes:

The single transformation equivalent to a reflection in the line $x = -1$ and then a reflection in the line $y = 1$ is a reflection.

Bob writes:

The single transformation equivalent to a reflection in the line $x = -1$ and then a reflection in the line $y = 1$ is a rotation.



Decide who is correct and then describe **fully** the **single** transformation.
You may use the shape on the grid to help you.

..... is correct because the single transformation is

..... [3]

9 A local newspaper reports that the value of houses fell by 12% between 1st September 2007 and 1st September 2008.

(a) On 1st September 2007 the value of Mike's house was £180 000.

What was its value on 1st September 2008?

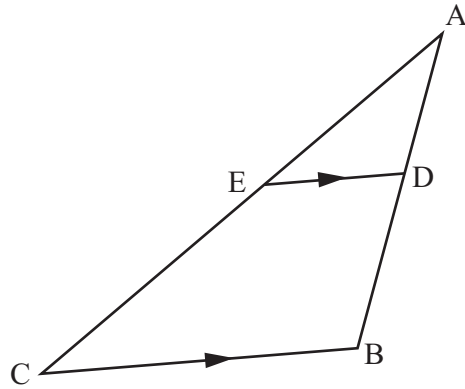
(a) £ [2]

(b) On 1st September 2008 the value of Jane's house was £275 000.

What was its value on 1st September 2007?

(b) £ [3]

- 10 ABC and ADE are triangles.
ED is parallel to CB.



Not to scale

- (a) Explain why triangles ADE and ABC are similar.

.....

.....

.....

..... [2]

- (b) $AE = 4\text{ cm}$, $AC = 10\text{ cm}$ and $ED = 3\text{ cm}$.

Calculate length CB.

(b) cm [2]

6

11 Joe invests £6500 at 4% **compound** interest for three years.

Calculate the value of his investment after three years.

£ [3]

12 This table shows some of Anne's monthly phone bills.

	January	February	March	April	May	June
Phone bill (£)	45	36	81	39	42	57

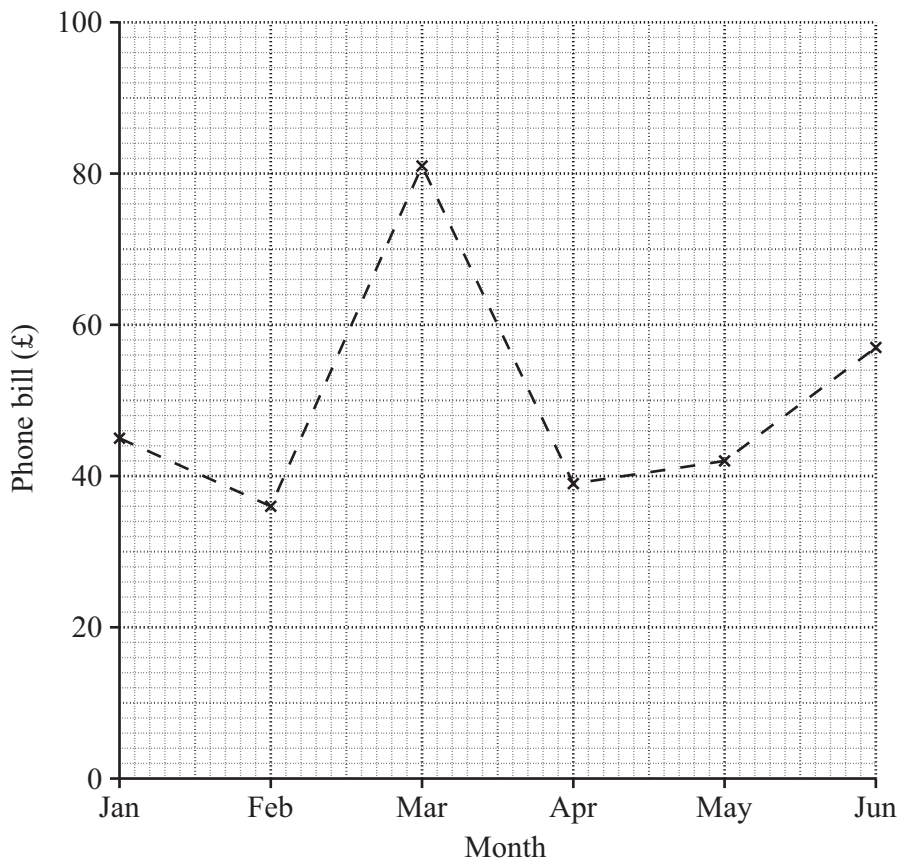
The 3-month moving average for January, February and March is £54.

(a) Calculate the next three moving averages.

(a) £54 £..... £..... £..... [2]

(b) The graph shows the monthly bills.

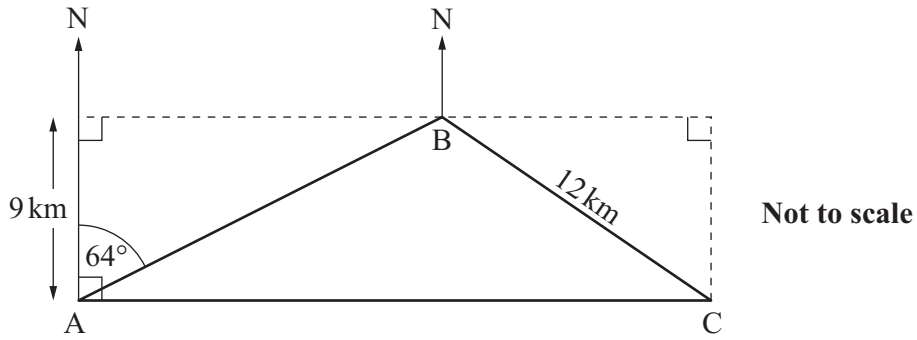
Plot the moving averages.



[2]

TURN OVER FOR QUESTION 13

13



Jules sails from A on a bearing of 064° to reach B.
 B is 9 km North of A.

(a) Calculate the distance from A to B.

(a) km [3]

(b) Jules then sails 12 km from B to C, where C is due East of A.

On what bearing does he sail?

(b) $^\circ$ [3]

Copyright Information

OCR is committed to seeking permission to reproduce all third-party content that it uses in its assessment materials. OCR has attempted to identify and contact all copyright holders whose work is used in this paper. To avoid the issue of disclosure of answer-related information to candidates, all copyright acknowledgements are reproduced in the OCR Copyright Acknowledgements Booklet. This is produced for each series of examinations and is freely available to download from our public website (www.ocr.org.uk) after the live examination series. If OCR has unwittingly failed to correctly acknowledge or clear any third-party content in this assessment material, OCR will be happy to correct its mistake at the earliest possible opportunity.

For queries or further information please contact the Copyright Team, First Floor, 9 Hills Road, Cambridge CB2 1GE.

OCR is part of the Cambridge Assessment Group; Cambridge Assessment is the brand name of University of Cambridge Local Examinations Syndicate (UCLES), which is itself a department of the University of Cambridge.