

Monday 16 January 2012 – Morning

GCSE MATHEMATICS C (GRADUATED ASSESSMENT)

B280B MODULE M10 – SECTION B

Candidates answer on the Question Paper.

OCR supplied materials:
None

- Other materials required:**
- Geometrical instruments
 - Tracing paper (optional)
 - Scientific or graphical calculator

Duration: 30 minutes



Candidate forename		Candidate surname	
--------------------	--	-------------------	--

Centre number						Candidate number				
---------------	--	--	--	--	--	------------------	--	--	--	--

INSTRUCTIONS TO CANDIDATES

- Write your name, centre number and candidate number in the boxes above. Please write clearly and in capital letters.
- Use black ink. HB pencil may be used for graphs and diagrams only.
- Answer **all** the questions.
- Read each question carefully. Make sure you know what you have to do before starting your answer.
- Show your working. Marks may be given for a correct method even if the answer is incorrect.
- Write your answer to each question in the space provided. Additional paper may be used if necessary but you must clearly show your candidate number, centre number and question number(s).
- Do **not** write in the bar codes.

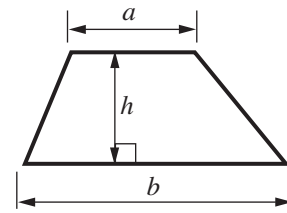
INFORMATION FOR CANDIDATES

- The number of marks is given in brackets [] at the end of each question or part question.
- Section B starts with question 8.
- You are expected to use a calculator in Section B of this paper.
- Use the π button on your calculator or take π to be 3.142 unless the question says otherwise.
- The total number of marks for this Section is **25**.
- This document consists of **12** pages. Any blank pages are indicated.

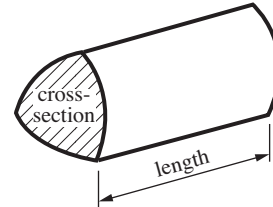
This paper has been pre modified for carrier language

Formulae Sheet

Area of trapezium = $\frac{1}{2}(a + b)h$



Volume of prism = (area of cross-section) \times length

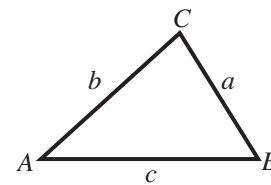


In any triangle ABC

Sine rule $\frac{a}{\sin A} = \frac{b}{\sin B} = \frac{c}{\sin C}$

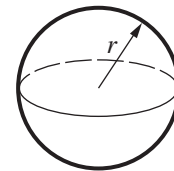
Cosine rule $a^2 = b^2 + c^2 - 2bc \cos A$

Area of triangle = $\frac{1}{2}ab \sin C$



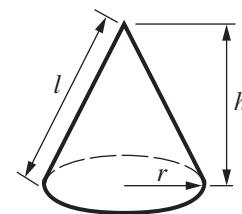
Volume of sphere = $\frac{4}{3}\pi r^3$

Surface area of sphere = $4\pi r^2$



Volume of cone = $\frac{1}{3}\pi r^2 h$

Curved surface area of cone = $\pi r l$



The Quadratic Equation

The solutions of $ax^2 + bx + c = 0$, where $a \neq 0$, are given by

$$x = \frac{-b \pm \sqrt{b^2 - 4ac}}{2a}$$

PLEASE DO NOT WRITE ON THIS PAGE

- 8 The amount, £ A , in a bank account t years after it was opened is given by this formula.

$$A = 35\,000 \times 1.052^t$$

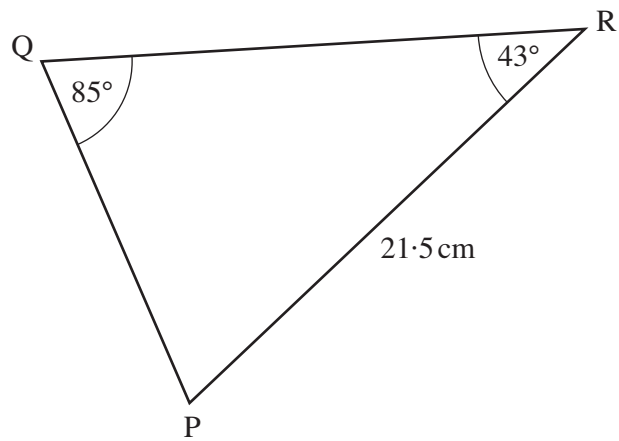
- (a) What was the amount 3 years after the account was opened?
Give your answer to the nearest pound.

(a) £..... [1]

- (b) How many years after the account was opened does the amount become greater than £50 000?

(b) years [2]

- 9 This is a sketch of the triangle PQR.



Not to scale

Calculate the area of triangle PQR.

..... cm^2 [5]

10 Solve algebraically these simultaneous equations.

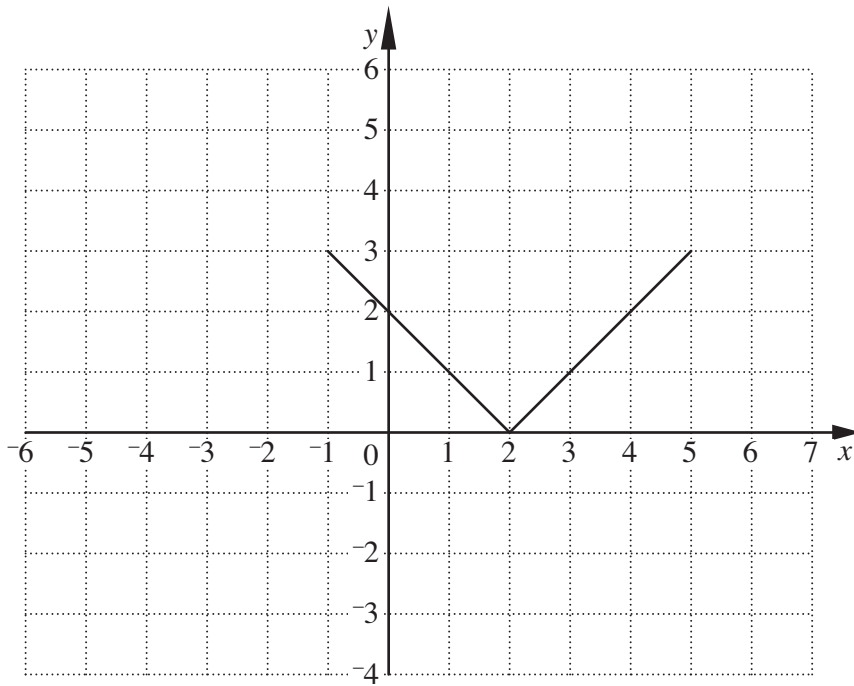
$$y = x - 2$$

$$x^2 + y^2 = 34$$

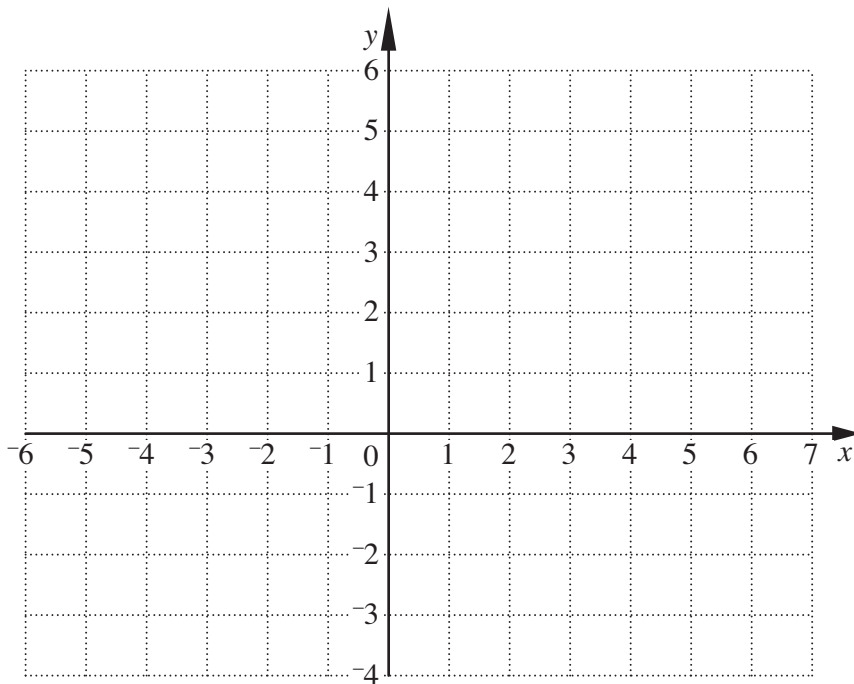
$$x = \dots\dots\dots, y = \dots\dots\dots$$

$$x = \dots\dots\dots, y = \dots\dots\dots \text{ [6]}$$

11 This is the graph of $y = f(x)$.

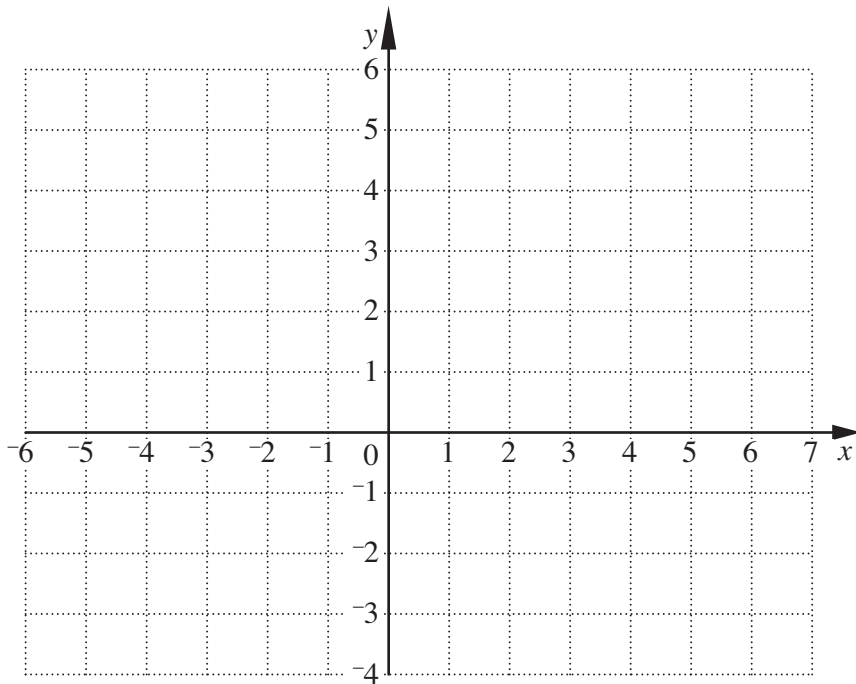


(a) On the grid below, draw the graph of $y = f(x) - 3$.



[1]

(b) On the grid below, draw the graph of $y = f(x + 3)$.

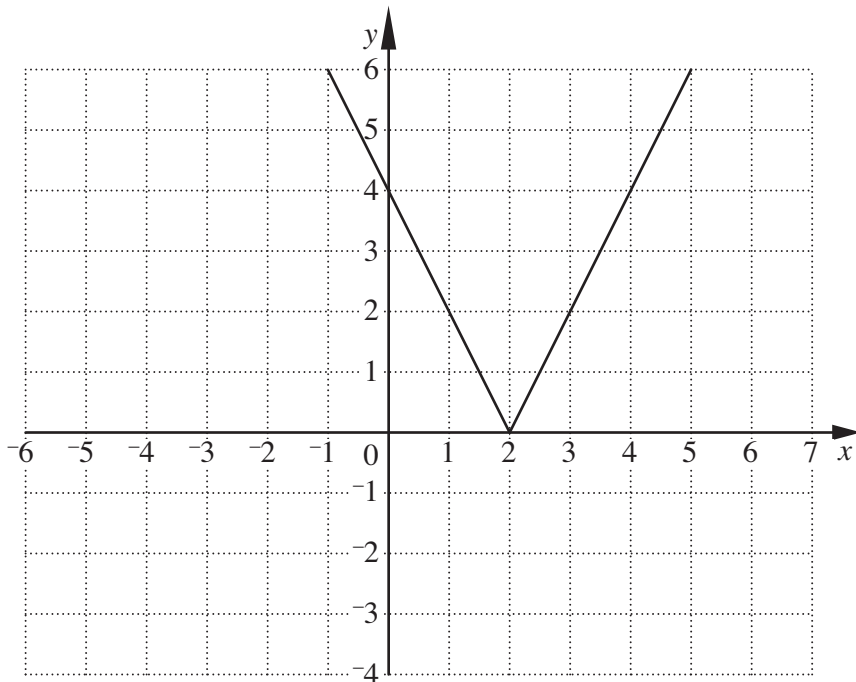


[1]

(c) The graph below is a transformation of $y = f(x)$.

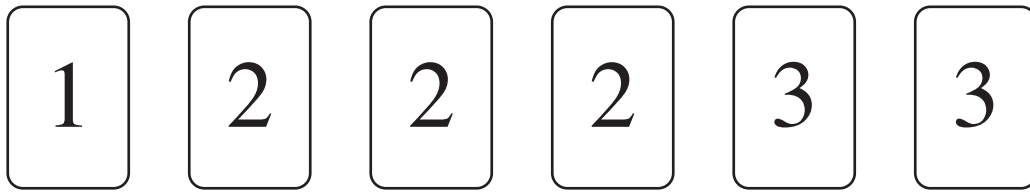
Circle the correct equation for this graph.

$y = f(x - 2)$
 $y = f(x) - 2$
 $y = 2f(x)$
 $y = f(2x)$
 $y = \frac{1}{2}f(x)$



[1]

12 These six cards are shuffled and placed face down.



Teresa picks a card at random.
She does not replace the card.
She then picks another card at random.

What is the probability that the number on the second card is lower than the number on the first card?

..... [4]

13 (a) By completing the square, express $x^2 - 6x + 7$ in the form $(x - a)^2 + b$.

(a) [3]

(b) Hence state the minimum value of $x^2 - 6x + 7$.

(b) [1]

10
BLANK PAGE

PLEASE DO NOT WRITE ON THIS PAGE

PLEASE DO NOT WRITE ON THIS PAGE

PLEASE DO NOT WRITE ON THIS PAGE



Copyright Information

OCR is committed to seeking permission to reproduce all third-party content that it uses in its assessment materials. OCR has attempted to identify and contact all copyright holders whose work is used in this paper. To avoid the issue of disclosure of answer-related information to candidates, all copyright acknowledgements are reproduced in the OCR Copyright Acknowledgements Booklet. This is produced for each series of examinations and is freely available to download from our public website (www.ocr.org.uk) after the live examination series.

If OCR has unwittingly failed to correctly acknowledge or clear any third-party content in this assessment material, OCR will be happy to correct its mistake at the earliest possible opportunity.

For queries or further information please contact the Copyright Team, First Floor, 9 Hills Road, Cambridge CB2 1GE.

OCR is part of the Cambridge Assessment Group; Cambridge Assessment is the brand name of University of Cambridge Local Examinations Syndicate (UCLES), which is itself a department of the University of Cambridge.