



**M6**

**GENERAL CERTIFICATE OF SECONDARY EDUCATION  
MATHEMATICS C (GRADUATED ASSESSMENT)  
MODULE M6 – SECTION A**

**B276A**



Candidates answer on the question paper.

**OCR supplied materials:**  
None

**Other materials required:**

- Geometrical instruments
- Tracing paper (optional)

**Tuesday 1 March 2011  
Morning**

**Duration: 30 minutes**



Candidate forename		Candidate surname	
--------------------	--	-------------------	--

Centre number						Candidate number				
---------------	--	--	--	--	--	------------------	--	--	--	--

**INSTRUCTIONS TO CANDIDATES**

- Write your name, centre number and candidate number in the boxes above. Please write clearly and in capital letters.
- Use black ink. Pencil may be used for graphs and diagrams only.
- Read each question carefully. Make sure you know what you have to do before starting your answer.
- Write your answer to each question in the space provided. Additional paper may be used if necessary but you must clearly show your candidate number, centre number and question number(s).
- Show your working. Marks may be given for a correct method even if the answer is incorrect.
- Answer **all** the questions.
- Do **not** write in the bar codes.

**INFORMATION FOR CANDIDATES**

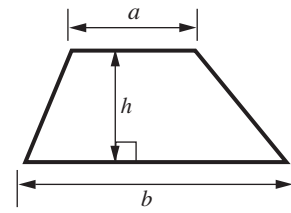
- The number of marks is given in brackets [ ] at the end of each question or part question.
- The total number of marks for this Section is **25**.
- This document consists of **8** pages. Any blank pages are indicated.

**WARNING**

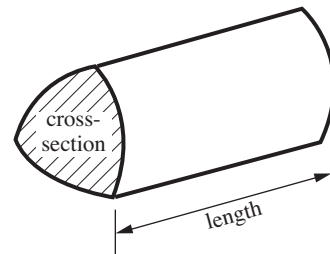
No calculator can be used for Section A of this paper

## Formulae Sheet

**Area of trapezium** =  $\frac{1}{2}(a + b)h$



**Volume of prism** = (area of cross-section)  $\times$  length



**PLEASE DO NOT WRITE ON THIS PAGE**

1 Work out.

(a)  $0.3 \times 0.3$

(a) ..... [1]

(b)  $\frac{2}{5} + \frac{3}{10}$

(b) ..... [2]

(c)  $\frac{6}{7} \times \frac{1}{4}$

Give your answer as a fraction in its simplest form.

(c) ..... [2]

(d)  $\frac{5}{8}$  as a decimal

(d) ..... [2]

2 (a) Solve.

$$4x + 6 = 20$$

(a) ..... [2]

(b) This equation is part of Alison's homework.

$$5(2x - 10) = 30$$

Here is Alison's answer.

$$5(2x - 10) = 30$$

$$10x - 10 = 30$$

$$10x = 40$$

$$x = 4$$

Circle the error and explain why Alison's answer is not correct.  
You do not need to work out the correct answer to the equation.


.....  
..... [2]

3 Lois and Nicola are having an argument.  
The probability that Lois is right is 0.6.  
The probability that Nicola is right is 0.12.  
They cannot both be right.

What is the probability that neither of them is right?

..... [2]

- 4 Construct a regular pentagon.  
The vertices of the pentagon should be on the circumference of the circle.



[3]

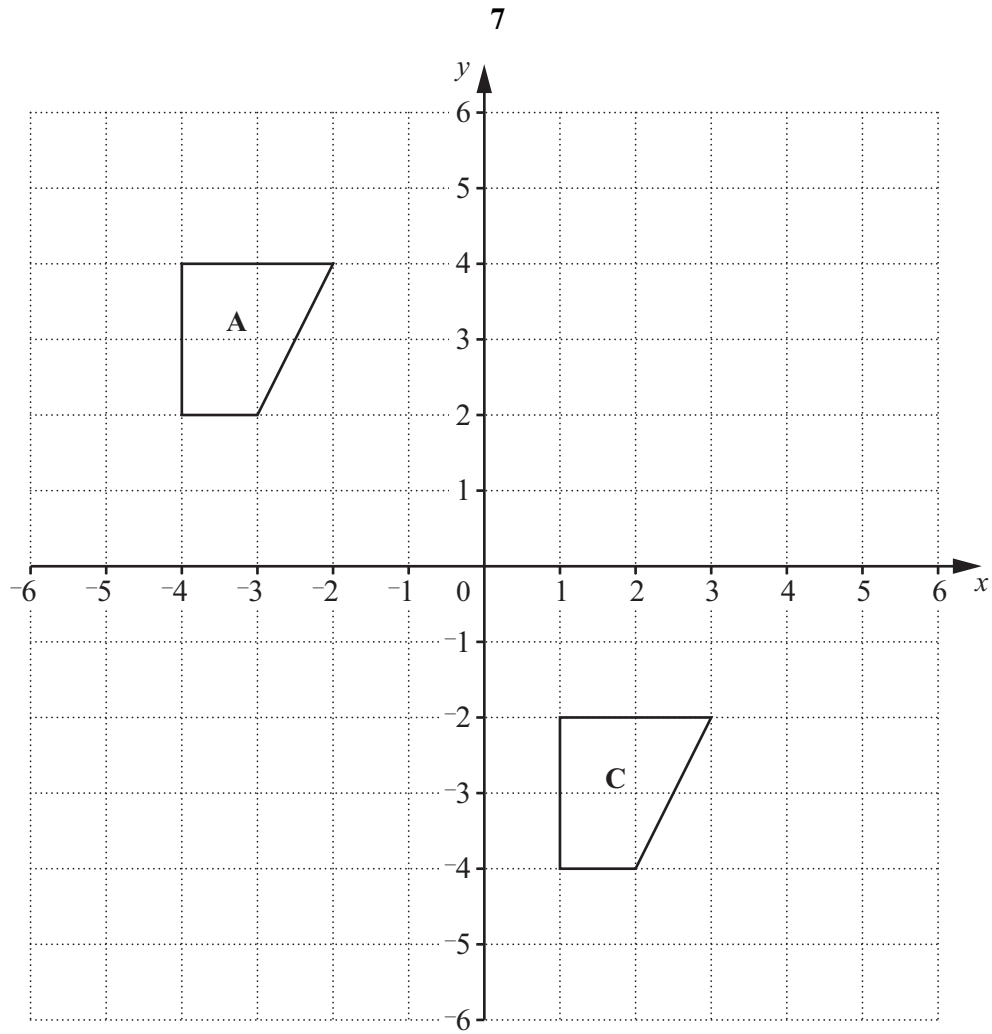
- 5 Rice costs £3.90 a kilogram.  
Colin buys 2.7 kg of rice.  
He pays with a £20 note.

How much change should he receive?

**You must show your working.**

£ ..... [4]

6



- (a) Rotate shape A  $90^\circ$  clockwise about the origin.  
Label the image B.

[3]

- (b) Describe fully the **single** transformation which maps shape A onto shape C.

.....  
..... [2]

**PLEASE DO NOT WRITE ON THIS PAGE**



**Copyright Information**

OCR is committed to seeking permission to reproduce all third-party content that it uses in its assessment materials. OCR has attempted to identify and contact all copyright holders whose work is used in this paper. To avoid the issue of disclosure of answer-related information to candidates, all copyright acknowledgements are reproduced in the OCR Copyright Acknowledgements Booklet. This is produced for each series of examinations and is freely available to download from our public website ([www.ocr.org.uk](http://www.ocr.org.uk)) after the live examination series.

If OCR has unwittingly failed to correctly acknowledge or clear any third-party content in this assessment material, OCR will be happy to correct its mistake at the earliest possible opportunity.

For queries or further information please contact the Copyright Team, First Floor, 9 Hills Road, Cambridge CB2 1GE.

OCR is part of the Cambridge Assessment Group; Cambridge Assessment is the brand name of University of Cambridge Local Examinations Syndicate (UCLES), which is itself a department of the University of Cambridge.