



**M7**

**GENERAL CERTIFICATE OF SECONDARY EDUCATION  
MATHEMATICS C (GRADUATED ASSESSMENT)  
MODULE M7 – SECTION B**

**B277B**



Candidates answer on the question paper.

**OCR supplied materials:**  
None

**Other materials required:**

- Geometrical instruments
- Tracing paper (optional)
- Scientific or graphical calculator

**Tuesday 1 March 2011  
Morning**

**Duration: 30 minutes**



Candidate forename		Candidate surname	
-----------------------	--	----------------------	--

Centre number						Candidate number				
---------------	--	--	--	--	--	------------------	--	--	--	--

**INSTRUCTIONS TO CANDIDATES**

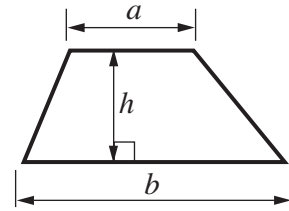
- Write your name, centre number and candidate number in the boxes above. Please write clearly and in capital letters.
- Use black ink. Pencil may be used for graphs and diagrams only.
- Read each question carefully. Make sure you know what you have to do before starting your answer.
- Write your answer to each question in the space provided. Additional paper may be used if necessary but you must clearly show your candidate number, centre number and question number(s).
- Show your working. Marks may be given for a correct method even if the answer is incorrect.
- Answer **all** the questions.
- Do **not** write in the bar codes.

**INFORMATION FOR CANDIDATES**

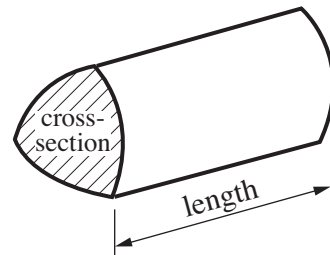
- The number of marks is given in brackets [ ] at the end of each question or part question.
- Section B starts with question 8.
- You are expected to use a calculator in Section B of this paper.
- Use the  $\pi$  button on your calculator or take  $\pi$  to be 3.142 unless the question says otherwise.
- The total number of marks for this Section is **25**.
- This document consists of **8** pages. Any blank pages are indicated.

## Formulae Sheet

**Area of trapezium** =  $\frac{1}{2} (a + b)h$



**Volume of prism** = (area of cross-section)  $\times$  length



**PLEASE DO NOT WRITE ON THIS PAGE**

- 8 (a) This table shows the number of goals scored in 32 football matches one weekend.

Number of goals	Frequency
0	3
1	2
2	5
3	7
4	8
5	1
6	4
7	2

A local radio station decided to send a reporter to a match chosen at random.

What is the probability that the reporter went to a match at which 5 or more goals were scored?

(a) ..... [2]

- (b) This table shows the attendances at the 32 football matches.

Attendance	Frequency	Midpoint of attendances
1– 200	5	100·5
201– 400	12	300·5
401– 600	8	500·5
601– 800	6	700·5
801–1000	1	900·5

Using the midpoints given, calculate an estimate of the mean attendance at the matches.

(b) ..... [3]

**Turn over**

- 9 Sue and Jim are both driving 130 miles from Eastleigh to Birmingham.  
Sue drives at an average speed of 65 mph and Jim drives at an average speed of 50 mph.

(a) Work out how many more minutes Jim's journey takes than Sue's journey.

(a) ..... minutes [3]

(b) Sue and Jim have the same type of car.

A report states that at an average speed of 50 mph the car travels 10.4 miles on one litre of petrol.  
Petrol costs 114.9p per litre.

(i) Work out how much the petrol for Jim's journey of 130 miles costs.

(b)(i) £ ..... [2]

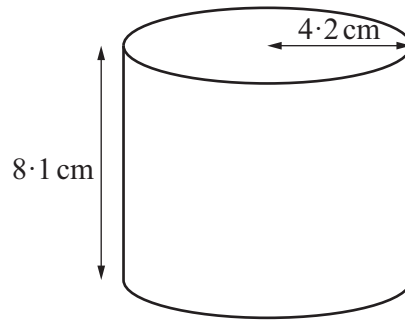
(ii) The report states that driving at 65 mph costs 21% more than driving at 50 mph.

Work out how much the petrol for Sue's journey costs.

(ii) £ ..... [2]

- 10 This can is a cylinder of height  $8.1$  cm and radius  $4.2$  cm.

A label covers the curved surface area of the can.  
There is no overlap on the label.



Calculate the area of the label.

.....  $\text{cm}^2$  [3]

11 Rearrange these formulas to make  $x$  the subject.

(a)  $y = \frac{x}{4}$

(a) ..... [1]

(b)  $y = 5x - 7$

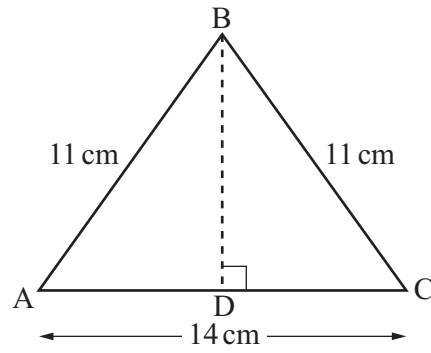
(b) ..... [2]

12 One solution of the equation  $x^3 - 2x = 15$  lies between 2 and 3.

Find this solution correct to one decimal place.  
You must show all your trials and their outcomes.

..... [3]

- 13 ABC is an isosceles triangle.  
BA = BC = 11 cm and AC = 14 cm.



Not to scale

Calculate the height BD.

..... cm [4]

**PLEASE DO NOT WRITE ON THIS PAGE**



**Copyright Information**

OCR is committed to seeking permission to reproduce all third-party content that it uses in its assessment materials. OCR has attempted to identify and contact all copyright holders whose work is used in this paper. To avoid the issue of disclosure of answer-related information to candidates, all copyright acknowledgements are reproduced in the OCR Copyright Acknowledgements Booklet. This is produced for each series of examinations and is freely available to download from our public website ([www.ocr.org.uk](http://www.ocr.org.uk)) after the live examination series.

If OCR has unwittingly failed to correctly acknowledge or clear any third-party content in this assessment material, OCR will be happy to correct its mistake at the earliest possible opportunity.

For queries or further information please contact the Copyright Team, First Floor, 9 Hills Road, Cambridge CB2 1GE.

OCR is part of the Cambridge Assessment Group; Cambridge Assessment is the brand name of University of Cambridge Local Examinations Syndicate (UCLES), which is itself a department of the University of Cambridge.