



M7

**GENERAL CERTIFICATE OF SECONDARY EDUCATION
 MATHEMATICS C (GRADUATED ASSESSMENT)
 MODULE M7 – SECTION A**

B277A



Candidates answer on the question paper.

OCR supplied materials:
 None

Other materials required:

- Geometrical instruments
- Tracing paper (optional)

**Tuesday 1 March 2011
 Morning**

Duration: 30 minutes



Candidate forename		Candidate surname	
--------------------	--	-------------------	--

Centre number										Candidate number				
---------------	--	--	--	--	--	--	--	--	--	------------------	--	--	--	--

INSTRUCTIONS TO CANDIDATES

- Write your name, centre number and candidate number in the boxes above. Please write clearly and in capital letters.
- Use black ink. Pencil may be used for graphs and diagrams only.
- Read each question carefully. Make sure you know what you have to do before starting your answer.
- Write your answer to each question in the space provided. Additional paper may be used if necessary but you must clearly show your candidate number, centre number and question number(s).
- Show your working. Marks may be given for a correct method even if the answer is incorrect.
- Answer **all** the questions.
- Do **not** write in the bar codes.

INFORMATION FOR CANDIDATES

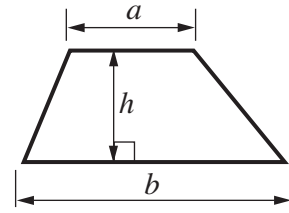
- The number of marks is given in brackets [] at the end of each question or part question.
- The total number of marks for this Section is **25**.
- This document consists of **8** pages. Any blank pages are indicated.

WARNING

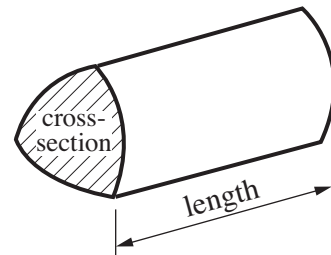
No calculator can be used for Section A of this paper

Formulae Sheet

Area of trapezium = $\frac{1}{2} (a + b)h$



Volume of prism = (area of cross-section) \times length



PLEASE DO NOT WRITE ON THIS PAGE

- 1 Jake and Liz are doing a number puzzle.
Jake starts with a number, multiplies it by 5 and then adds 14.
Liz starts with the same number, adds on 1 and then multiplies the result by 2.
They get the same answer.

(a) Complete this equation to represent the puzzle.

$$5x + 14 = \dots\dots\dots$$

[1]

(b) Solve the equation to find the number.

(b) [3]

- 2 The answer to $\sqrt{(3^3 + 5^3)}$ lies between consecutive integers.

Work out the two integers.

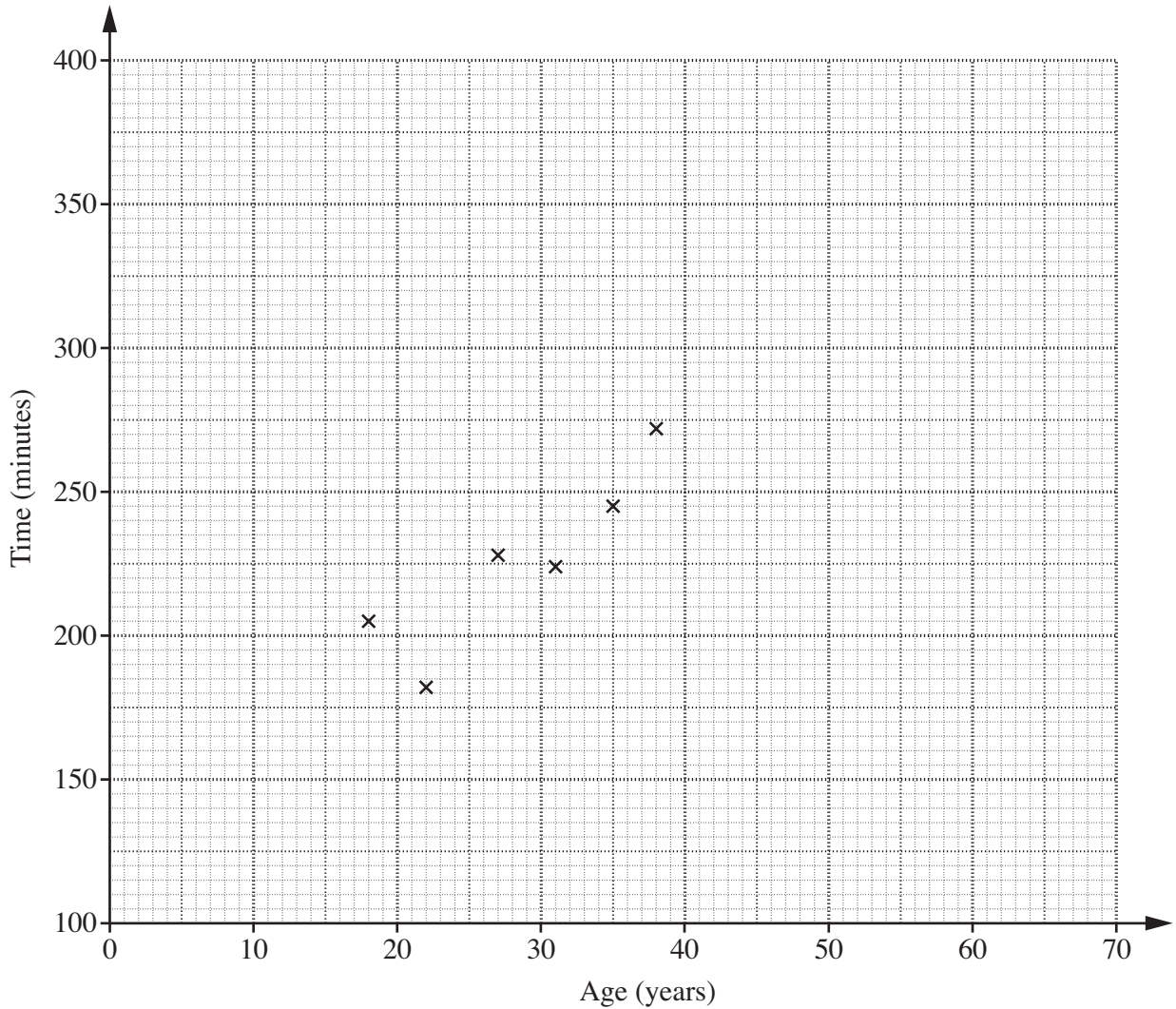
..... and [3]

- 3 Ten members of a family take part in a marathon.
This table shows their ages and the number of minutes they took to complete the marathon.

Age (years)	18	22	27	31	35	38	45	49	63	65
Time (minutes)	205	182	228	224	245	272	290	265	325	355

The information for the first six people is plotted on the scatter diagram below.

- (a) Complete the scatter diagram for the last four people.



[1]

- (b) Describe the correlation.

..... [1]

- (c) (i) Draw a line of best fit on your diagram. [1]

- (ii) Chris missed the marathon. Chris is 52 years old.
Use your line to estimate how long Chris would have taken to complete the marathon.

(c)(ii) minutes [1]

4 The n th term of a sequence is $5n - 2$.

(a) Work out the first three terms of this sequence.

(a) [2]

(b) Which term of the sequence is 58?

(b) [1]

(c) Explain why 99 is not a term in this sequence.

.....
..... [1]

5 Mia has completed these three calculations.

A $31.4 \times 0.44 = 45.216$

B $21.4 \div 0.68 = 14.552$

C $23.43 \div 1.42 = 16.5$

Only one answer is correct.

(a) Which answer is correct?

(a) [1]

(b) Explain why the other two answers are wrong.
Do **not** do the full calculations.

..... is wrong because

..... [1]

..... is wrong because

..... [1]

- 6 (a) Write these fractions in order of size, smallest first.

$$\frac{3}{5} \quad \frac{4}{15} \quad \frac{9}{20}$$

.....
smallest

[1]

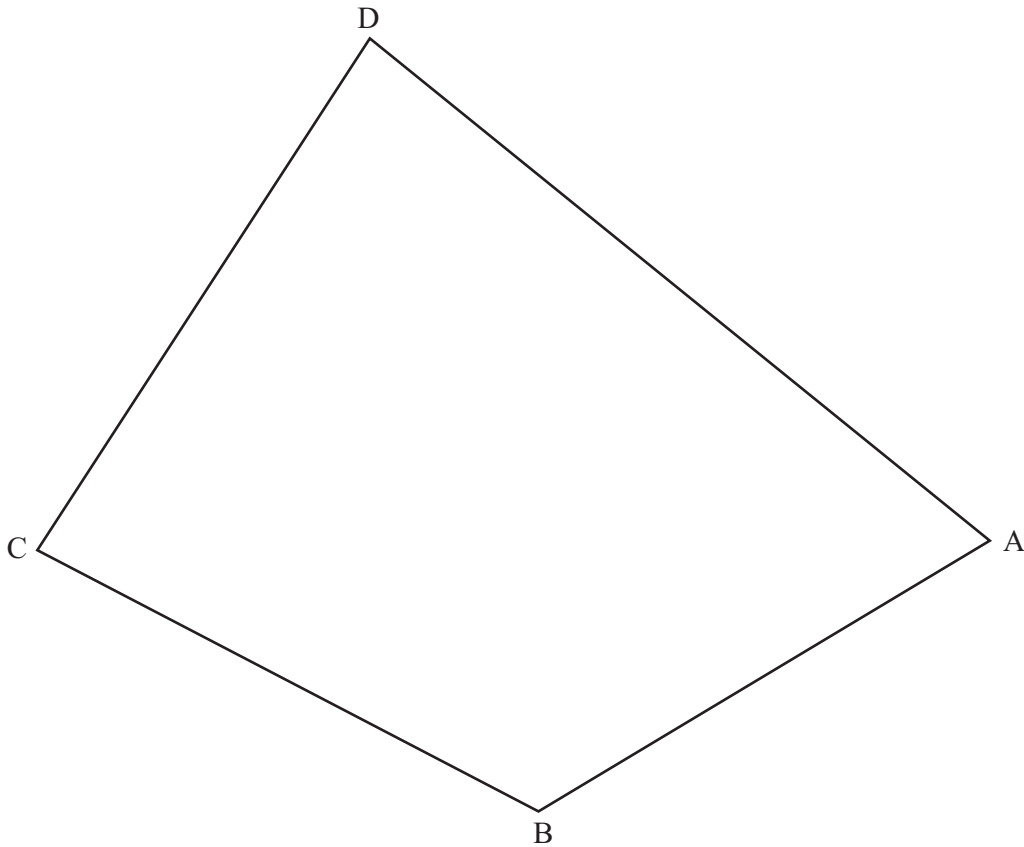
- (b) Express $\frac{1}{6}$ as a recurring decimal.

(b) [2]

TURN OVER FOR QUESTION 7

- 7 Use ruler, compasses and pencil only to answer this question.
Leave in all your construction lines.

ABCD is a quadrilateral.



- (a) Construct the bisector of angle B. [2]
- (b) Identify clearly the locus of points closer to AB than to BC **and** more than 5 cm from A. [2]

Copyright Information

OCR is committed to seeking permission to reproduce all third-party content that it uses in its assessment materials. OCR has attempted to identify and contact all copyright holders whose work is used in this paper. To avoid the issue of disclosure of answer-related information to candidates, all copyright acknowledgements are reproduced in the OCR Copyright Acknowledgements Booklet. This is produced for each series of examinations and is freely available to download from our public website (www.ocr.org.uk) after the live examination series. If OCR has unwittingly failed to correctly acknowledge or clear any third-party content in this assessment material, OCR will be happy to correct its mistake at the earliest possible opportunity.

For queries or further information please contact the Copyright Team, First Floor, 9 Hills Road, Cambridge CB2 1GE.

OCR is part of the Cambridge Assessment Group; Cambridge Assessment is the brand name of University of Cambridge Local Examinations Syndicate (UCLES), which is itself a department of the University of Cambridge.